

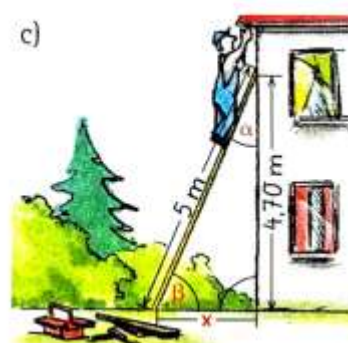
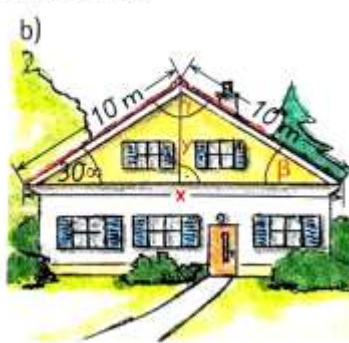
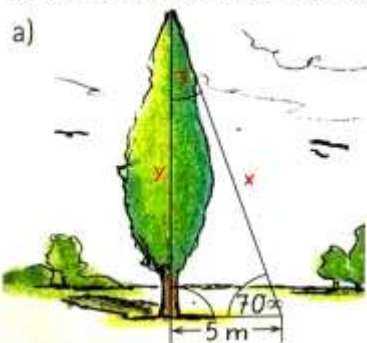


Winkelfunktionen

mit Sinus, Cosinus und Tangens rechnen

TG
Ü17

5. Berechne die fehlenden Strecken und Winkel.



Grid area for calculations.